



NAME _____


DATE _____

PERIOD _____

Unit 1, Lesson 12

Practice Problems

1. What is the surface area of this rectangular prism?



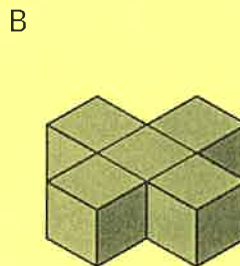
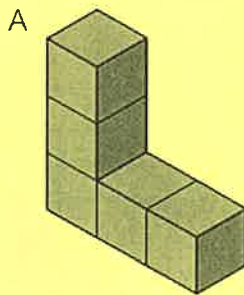
- A. 16 square units
- B. 32 square units
- C. 48 square units
- D. 64 square units

2. Which description can represent the surface area of this trunk?

- A. The number of square inches that cover the top of the trunk.
- B. The number of square feet that cover all the outside faces of the trunk.
- C. The number of square inches of horizontal surface inside the trunk.
- D. The number of cubic feet that can be packed inside the trunk.



3. Which figure has a greater surface area?




NAME _____

DATE _____

PERIOD _____

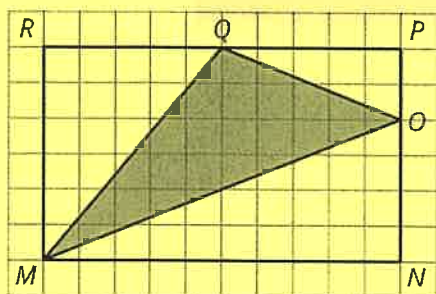
4. A rectangular prism is 4 units high, 2 units wide, and 6 units long. What is its surface area in square units? Explain or show your reasoning.

5. Draw an example of each of the following triangles on the grid.



- a. A right triangle with an area of 6 square units.
- b. An acute triangle with an area of 6 square units.
- c. An obtuse triangle with an area of 6 square units.

6. Find the area of triangle MOQ in square units. Show your reasoning.



7. Find the area of this shape. Show your reasoning.

